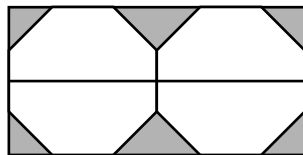
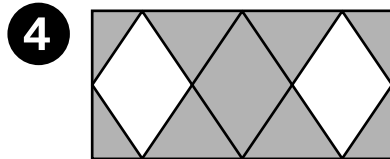
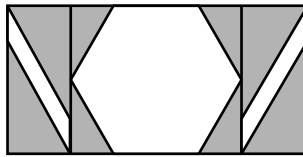
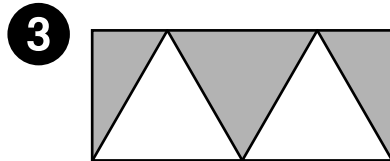
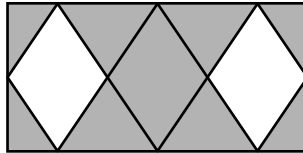
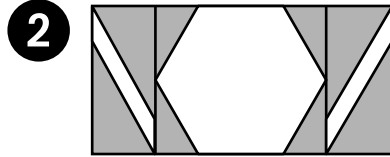
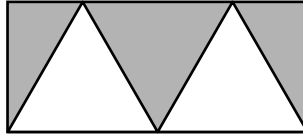
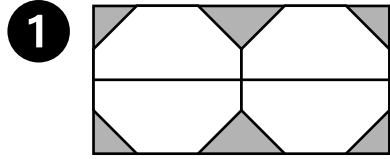


Mathematical Thinking at Grade 1

Match the Quilts

Match the quilts with the same pattern.

**Mixed Review and Test Prep**

5 How many eyes?

2 10 12 20

(A) (B) (C) (D)

6 How many noses?

10 7 6 3

(A) (B) (C) (D)

