





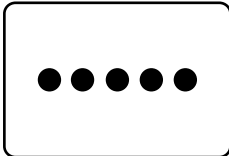

Building Number Sense



Dots, Dots, and More Dots



Draw another way to show the same number of dots.

1  

2  

3  

4  

5  

Mixed Review and Test Prep

6 How many shoes are the same?

- 7 5 4 2
 (A) (B) (C) (D)

