


Building Number Sense

How Many Apples?


There were 7 apples on each tree, but some fell off. Write how many apples are still on the tree and how many fell off.

1




On _____ Off _____

2




On _____ Off _____

3




On _____ Off _____

4




On _____ Off _____

5



On _____ Off _____

6



On _____ Off _____