

Building Number Sense


What's in the Bag?

There are 5 balls in all. Write how many balls are **outside** the bag. Write how many balls are **inside** the bag.

1

Outside _____

Inside _____

2


Outside _____

Inside _____

3

Outside _____

Inside _____

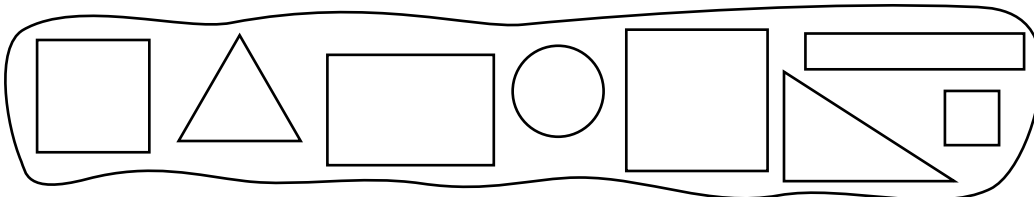
4

Outside _____

Inside _____

Mixed Review and Test Prep

5 How many of these shapes have 4 sides?



8

(A)

5

(B)

3

(C)

2

(D)