


Building Number Sense

What's Inside the Cup?


There are 9 counters in all.

Write how many counters are **outside** the cup. Write how many counters are **inside** the cup.




Outside _____

Inside _____




Outside _____

Inside _____



Outside _____

Inside _____




Outside _____

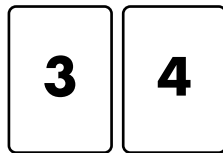
Inside _____

Mixed Review and Test Prep

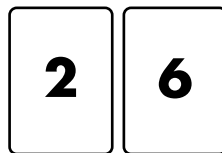
5 Which pair of number cards has a total of 7?




(A)



(B)



(C)



(D)