


Building Number Sense

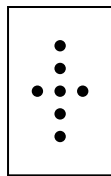
How Many Dots?

Write the number
that tells how
many dots.

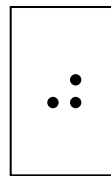
1




2



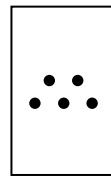
3



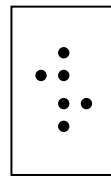
4




5



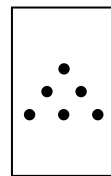
6



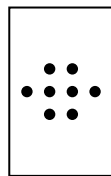
7




8




9



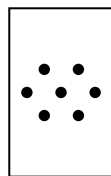
10



11




12

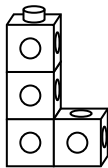


Mixed Review and Test Prep


13 Which shows 4 cubes?



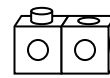
(A)



(B)



(C)



(D)