


Building Number Sense


Which Holds More Cubes?



A




B



C



D



E

Write the letter of the container that holds more.

1

Which container holds more, A or B? _____

2

Which container holds more, B or C? _____

3

Which container holds more, D or E? _____

4

Which container holds more, A or E? _____

5

Which container holds more, C or D? _____
