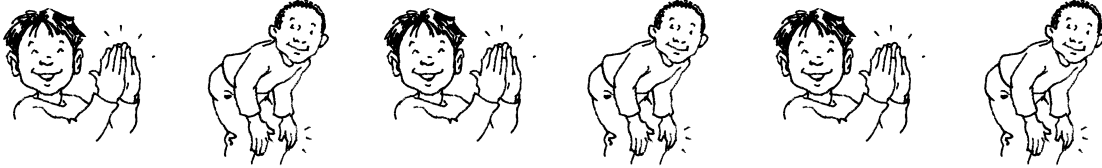


Building Number Sense

All Kinds of Patterns

Color the boxes to make a **color** pattern that matches the **movement** pattern.

1



--	--	--	--	--	--

2



--	--	--	--	--	--

3



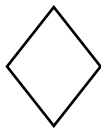
--	--	--	--	--	--

Mixed Review and Test Prep

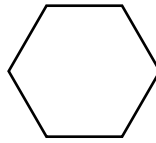
4 Which pattern block has 6 sides?



(A)



(B)



(C)



(D)