

## Building Number Sense

**More Story Problems**

Solve each problem.

Record your work.

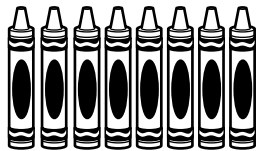

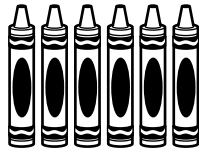

Show how you found your answer.

**1** Rick has 12 shells. He finds 3 more. How many shells does he have now? \_\_\_\_\_

**2** There are 10 lizards on the rocks. 6 of the lizards run away. How many lizards are still on the rocks? \_\_\_\_\_

**Mixed Review and Test Prep**

**3** There should be 8 crayons in the box. How many more are needed?

**(A)****(B)****(C)****(D)**