


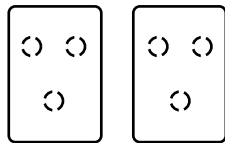
Building Number Sense

Draw It, Write It

Draw dots on the cards to make each number.
Use only the dot cards shown. Write the addition combination.

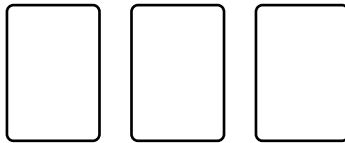


1 Make 6.




$$3 + 3$$

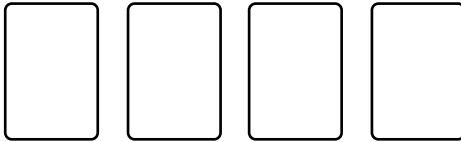
2 Make 12.



3 Make 9.



4 Make 8.



Mixed Review and Test Prep

5 How many pattern blocks are in this design?

- 8 9 10 12
 (A) (B) (C) (D)

