



Number Games and Story Problems


What Does 10 Look Like?


Look at each group of dots. Write a number sentence that tells what you see.



$$4 + 2 + 4 = 10$$





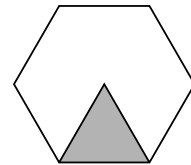


Mixed Review and Test Prep

5 How many triangles would fill the hexagon?

2 4 5 6

(A) (B) (C) (D)



6 How many triangles would fill two hexagons?

14 12 5 6

(A) (B) (C) (D)