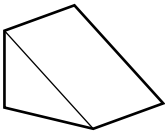
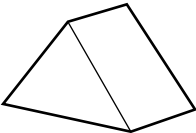
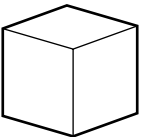
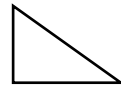


Quilt Squares and Block Towns**Make the Match**

Match each Geoblock to a footprint.

Geoblocks**1****2****3****4****5****Footprints**

6 What is the name of Geoblock 1's footprint? _____

7 What is the name of Geoblock 2's footprint? _____

8 What is the name of Geoblock 3's footprint? _____