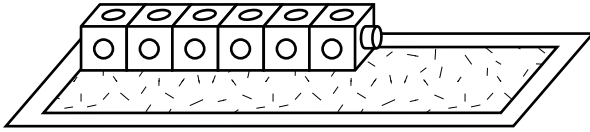
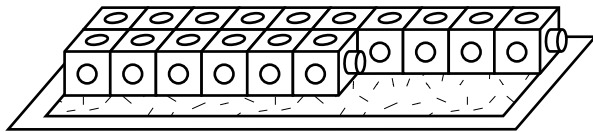


Another Look at Tens



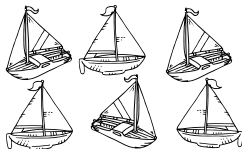

- 1 How many cubes are on the mat above? _____
- 2 How many more cubes do you need to make a row of 10? _____




- 3 How many rows of 10 cubes each are on the mat? _____
- 4 How many extra cubes are on the mat? _____
- 5 How many cubes in all are on the mat? _____

Mixed Review and Test Prep


- 6 Which set of objects matches the number of dots on the cube?




(A)



(B)



(C)



(D)