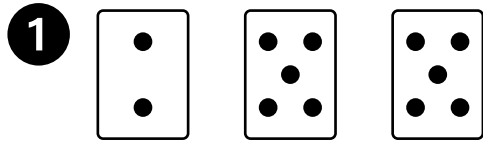


## Number Games and Story Problems


**Which Combination?**

The dot cards show 12.  
Circle the combination that matches the cards.




$$2 + 4 + 5$$

$$2 + 5 + 5$$




$$4 + 3 + 5$$

$$4 + 5 + 2$$



$$1 + 5 + 6$$

$$6 + 2 + 5$$



$$7 + 4$$

$$4 + 8$$

**Mixed Review and Test Prep**

5 Which tower has the most cubes?

(A) A

(B) B

(C) C

(D) D

