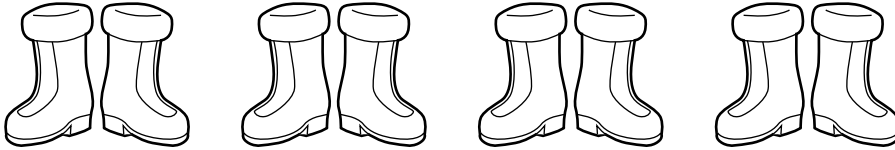




Number Games and Story Problems

Pairs of Things

Write how many
are in each group.

1

8

2**3****4****5****Mixed Review and Test Prep****6** Which shape has 4 sides?

(A)



(B)



(C)



(D)