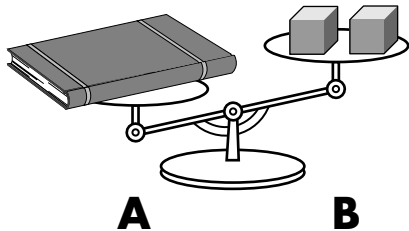


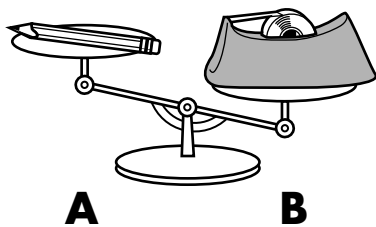
**Bigger, Taller, Heavier, Smaller**

## Look at Balances

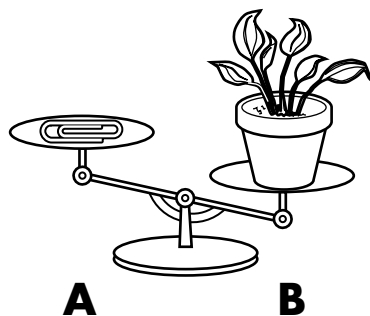
Which side of the balance is showing the **heavier** object? Write **A** or **B**.

**1**


\_\_\_\_\_

**2**


\_\_\_\_\_

**3**


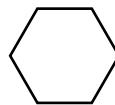
\_\_\_\_\_

## Mixed Review and Test Prep

**4** Which block is used the most in this design?


**(A)**

**(B)**

**(C)**

**(D)**
