



Bigger, Taller, Heavier, Smaller**Which Is Lighter?**

Circle the name of the object that is lighter.

1


feather

stapler

2


rock

balloon

3

mitten

button

4

ball

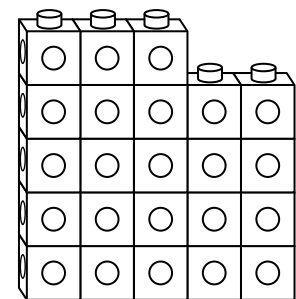
shoe

Mixed Review and Test Prep

- 5** Each cube stands for one student.
How many students are in school today?

19 20 22 23

(A) (B) (C) (D)

**Students Here Today**