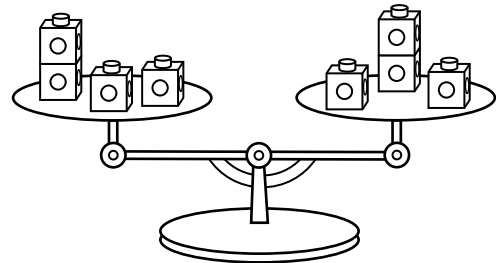
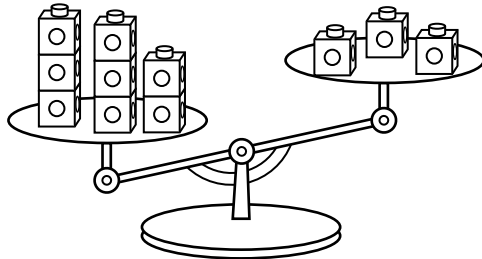


Bigger, Taller, Heavier, Smaller

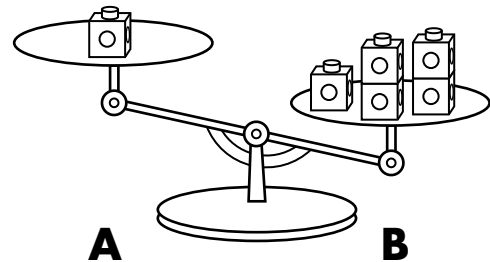
Make It Balance

- 1** Circle the balance scale that is even.



- 2** Look at the balance. Which group of cubes is heavier?

- 3** To balance the two sides, which side would you add cubes to?



- 4** Look at the balance. Which side has the lighter object?

- 5** To balance the objects, which side would you add pencils or cubes to?

