





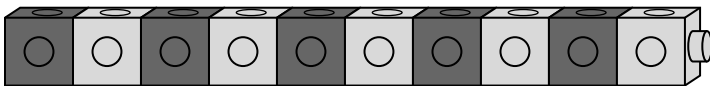


Number Games and Story Problems**The Sum Is ...**

Circle the cards that make each sum.

1 The sum is 15.**2** The sum is 9.**3** The sum is 16.**4** The sum is 7.**5** The sum is 11.**6** The sum is 13.**7** The sum is 4.**8** The sum is 20.**Mixed Review and Test Prep****9** How many cubes are in this pattern train?

11

(A)

10

(B)

9

(C)

8

(D)