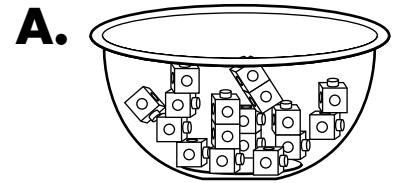


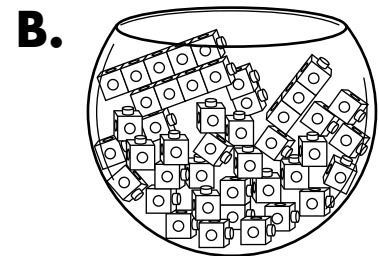
Bigger, Taller, Heavier, Smaller**Solve the Riddles**

Write the letter of the container that solves the riddle.

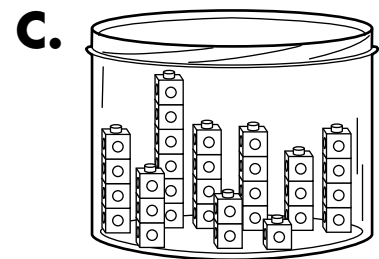
- 1** I have more than 20 cubes.
I have fewer than 40 cubes.
Which container am I?



- 2** I have between 1 and 20 cubes.
I have more than 10 cubes.
Which container am I?



- 3** I have more than Container A.
I have more than Container C.
Which container am I?



- 4** I have fewer than 25 cubes.
I have between 1 and 10 cubes.
Which container am I?

