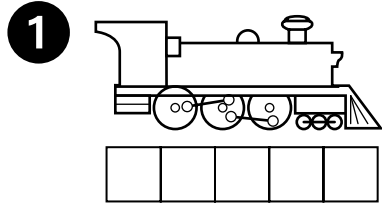



## Measure with Squares

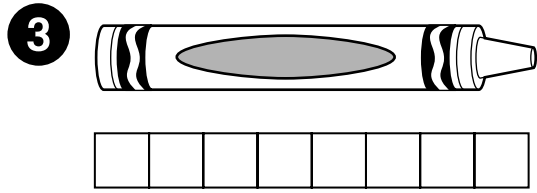
Write the number that tells how many squares long or high the picture is.



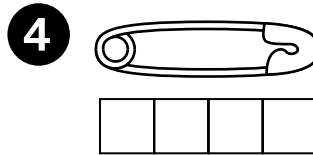
\_\_\_\_\_



\_\_\_\_\_



\_\_\_\_\_




\_\_\_\_\_

5 Name an object that is shorter than the crayon in Exercise 3.


\_\_\_\_\_

## Mixed Review and Test Prep

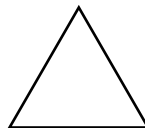
6 Which shape does not belong in the group?



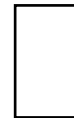
(A)



(B)



(C)



(D)