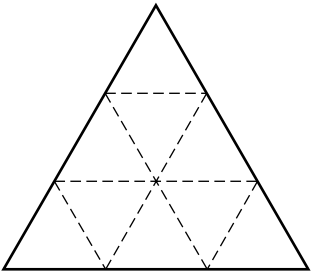


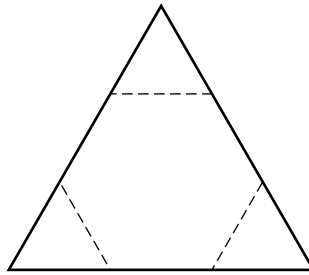
Three Designs

Look at the designs.

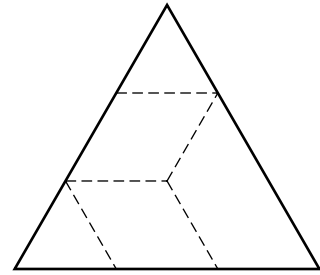
Answer the questions.



Design A



Design B



Design C

- 1 How many blocks were used in Design A? _____
- 2 How many blocks were used in Design B? _____
- 3 How many blocks were used in Design C? _____
- 4 Which design used the **fewest** blocks? _____
- 5 Which design used the **most** blocks? _____
- 6 How many triangles were used in Design C? _____
- 7 Which design used the most triangles? _____
- 8 How many more blocks were used in Design A than in Design B? _____